

Name: _____

Math is Gold

Date: _____

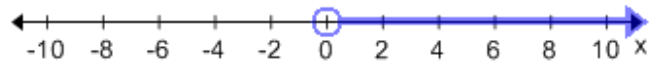
Topic: One Variable Inequalities

(id:one_var_ineq_match_A.1)

Title: Match the inequalities

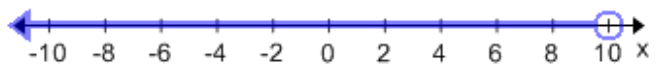
1) _____ $x \leq 6$

A.



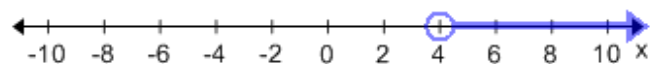
2) _____ $x > 2$

B.



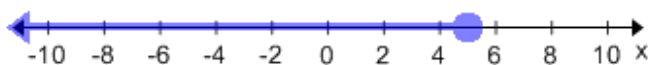
3) _____ $x < -4$

C.



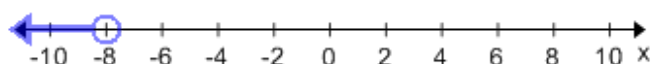
4) _____ $x \geq -2$

D.



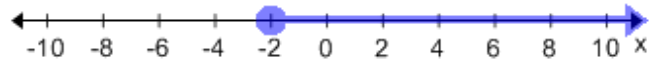
5) _____ $x < 10$

E.



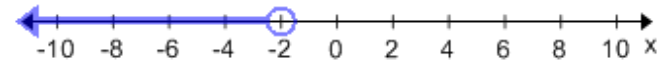
6) _____ $x \leq 5$

F.



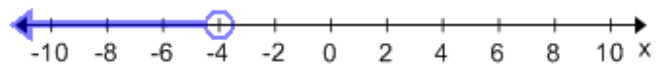
7) _____ $x > 0$

G.



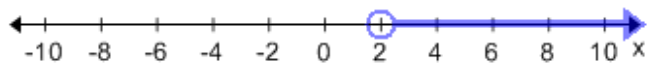
8) _____ $x < -8$

H.



9) _____ $x > 4$

I.



10) _____ $x < -2$

J.

