

Name: _____

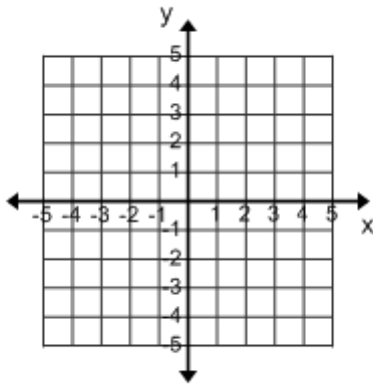
Math is Gold

Date: _____

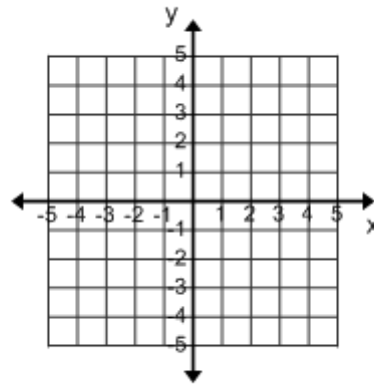
Title: Graph each equation

(id:lines_pt_slope_graph_A.1)

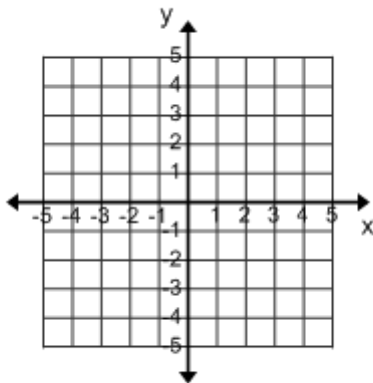
1) $y - 3 = -\frac{1}{3}(x + 2)$



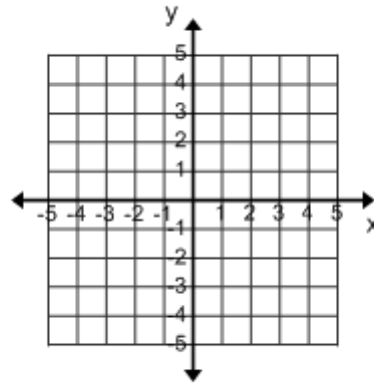
2) $y - 1 = -\frac{3}{2}(x + 1)$



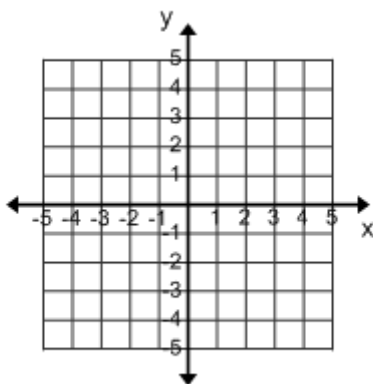
3) $y - 1 = \frac{4}{3}(x + 2)$



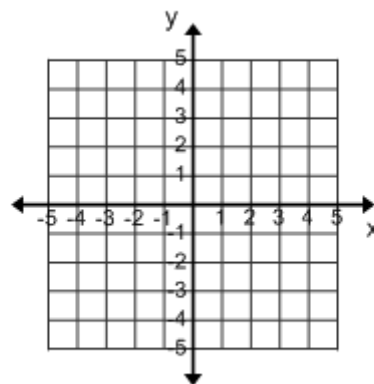
4) $y + 4 = \frac{1}{5}(x + 3)$



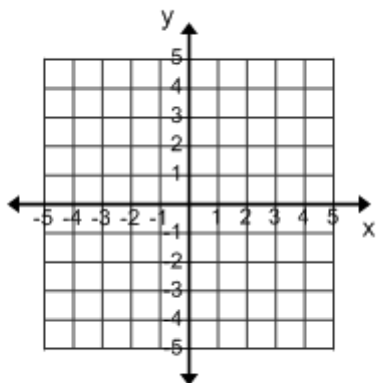
5) $y - 2 = x + 2$



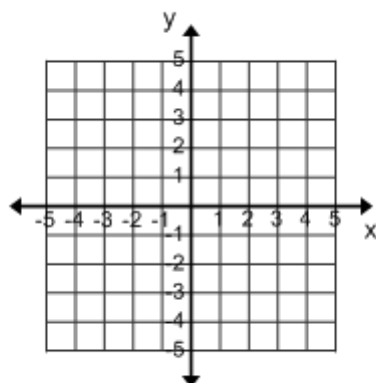
6) $y + 2 = 2x$



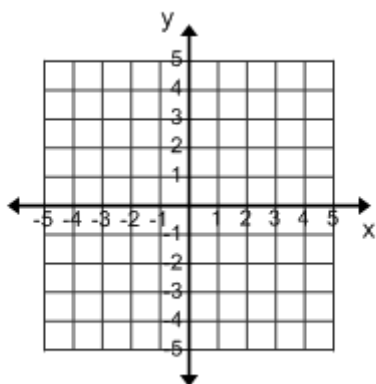
$$7) y + 3 = \frac{2}{3}(x + 2)$$



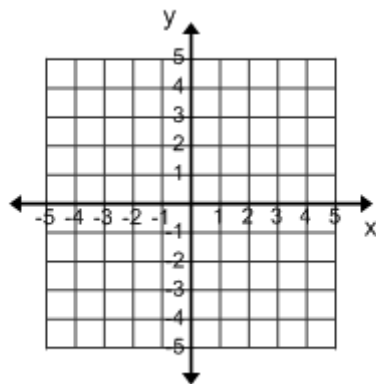
$$8) y + 5 = \frac{4}{3}(x + 1)$$



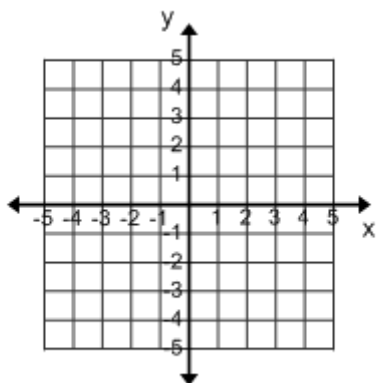
$$9) y = \frac{3}{4}(x - 4)$$



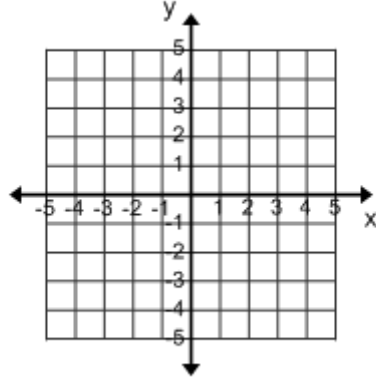
$$10) y + 3 = -\frac{1}{4}(x - 5)$$



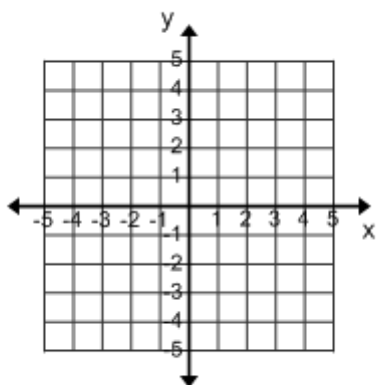
$$11) y - 1 = \frac{1}{2}(x + 4)$$



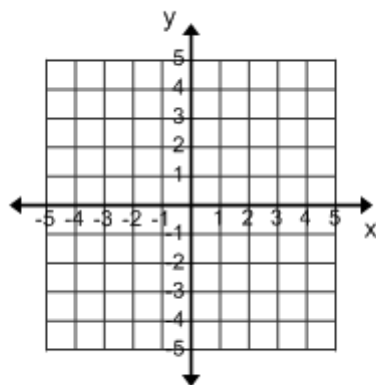
$$12) y - 4 = -2(x + 4)$$



13) $y + 3 = 2x$



14) $y - 2 = \frac{1}{3}(x - 2)$



15) $y = \frac{3}{4}(x + 4)$

