

Name: \_\_\_\_\_

# Math is Gold

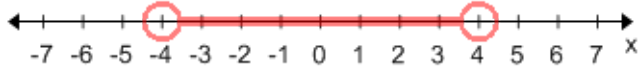
Date: \_\_\_\_\_

Topic: Compound Inequalities

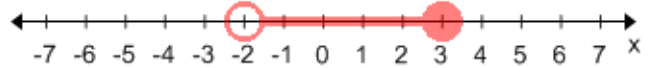
(id:comp\_ineq\_write\_M.1)

Title: Write a compound inequality for each graph.

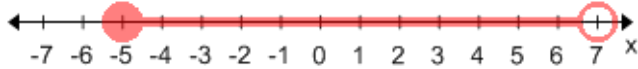
1) Ans: \_\_\_\_\_



2) Ans: \_\_\_\_\_



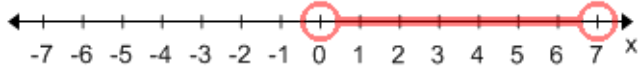
3) Ans: \_\_\_\_\_



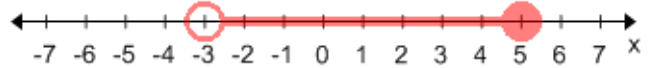
4) Ans: \_\_\_\_\_



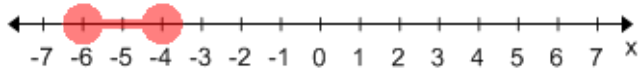
5) Ans: \_\_\_\_\_



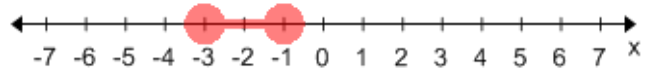
6) Ans: \_\_\_\_\_



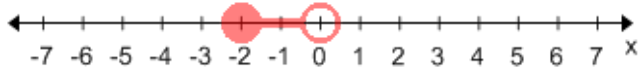
7) Ans: \_\_\_\_\_



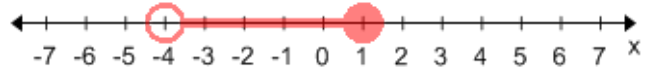
8) Ans: \_\_\_\_\_



9) Ans: \_\_\_\_\_



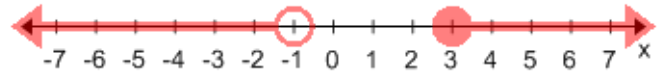
10) Ans: \_\_\_\_\_



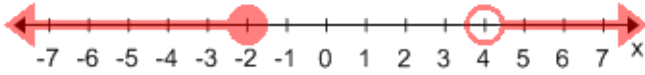
11) Ans: \_\_\_\_\_



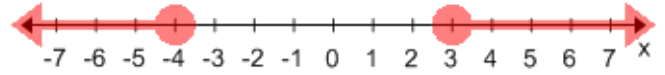
12) Ans: \_\_\_\_\_



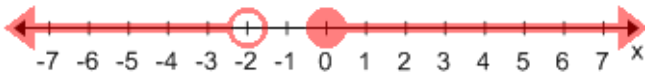
13) Ans: \_\_\_\_\_



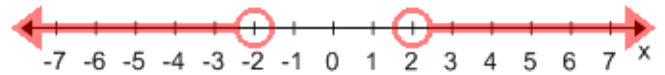
14) Ans: \_\_\_\_\_



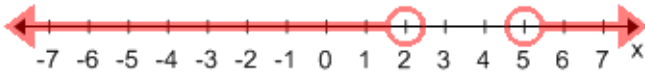
15) Ans: \_\_\_\_\_



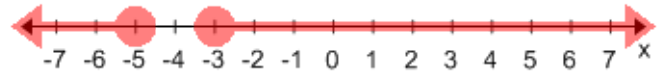
16) Ans: \_\_\_\_\_



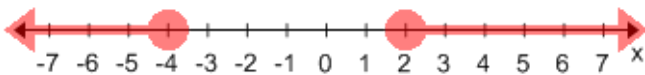
17) Ans: \_\_\_\_\_



18) Ans: \_\_\_\_\_



19) Ans: \_\_\_\_\_



20) Ans: \_\_\_\_\_

